
























































Stir It Up!

Write an addition problem in each box.
Use the code.
Solve.



Code	
	= 3
	= 5
	= 7
	= 4
	= 6
	= 8

<p>A.</p>  3  8  + 6 <hr/> 17	<p>B.</p>    + _____	<p>C.</p>    + _____	<p>D.</p>    + _____
<p>E.</p>    + _____	<p>F.</p>    + _____	<p>G.</p>    + _____	<p>H.</p>    + _____
<p>I.</p>    + _____	<p>J.</p>    + _____	<p>K.</p>    + _____	<p>L.</p>    + _____
<p>M.</p>    + _____	<p>N.</p>    + _____	<p>O.</p>    + _____	<p>P.</p>    + _____